

What is continental drift?

Lesson Review

PART A Complete the following.

1. Explain continental drift in your own words. _____

2. Who was Alfred Wegener? _____

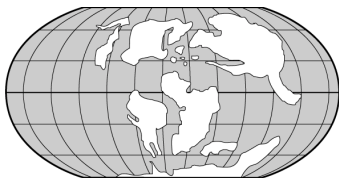
PART B Place a check mark beside each statement that supports continental drift.

- _____ 1. Alfred Wegener named a giant landmass Pangaea.
- _____ 2. There are seven continents.
- _____ 3. *Mesosaurus* fossils are found in Africa and South America.
- _____ 4. Canada, the United States, and northern Europe have similar climates.
- _____ 5. Mountain ranges on different continents seem to match.
- _____ 6. Rocks along the edges of one continent match those along the edge of another continent.
- _____ 7. The continents are surrounded by water.
- _____ 8. The coastlines of South America and Africa seem to fit together like jigsaw-puzzle pieces.

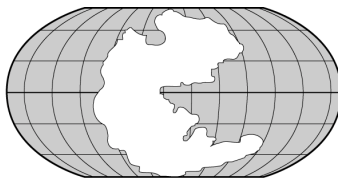
Skill Challenge

Skills: sequencing, inferring

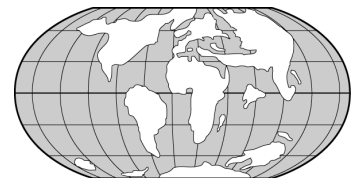
Place the drawings of the way Earth looked in the correct order based upon continental drift. Write the number of years ago in the space provided. Use these labels: 225 million years ago, 180 million years ago, 100 million years ago, 50 million years ago, and present.



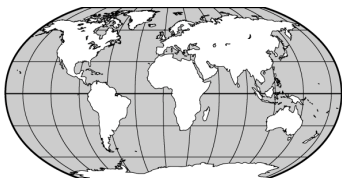
1. _____



2. _____



3. _____



4. _____



5. _____